



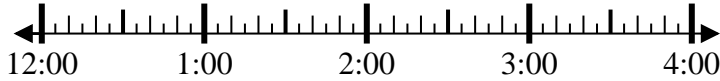
Solve each problem.

Answers

1) Start: _____

Elapsed: 1 hr & 25 mins

End: 1:35

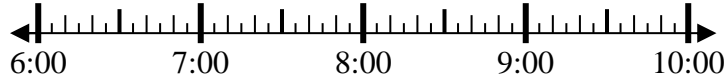


1. _____

2) Start: _____

Elapsed: 2 hrs & 10 mins

End: 8:50

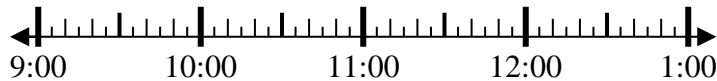


2. _____

3) Start: _____

Elapsed: 2 hrs & 50 mins

End: 11:55

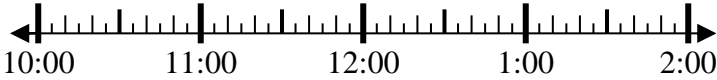


3. _____

4) Start: _____

Elapsed: 2 hrs & 40 mins

End: 1:25

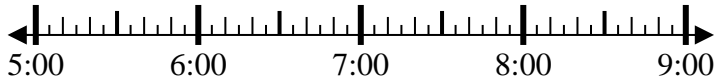


4. _____

5) Start: _____

Elapsed: 1 hr & 30 mins

End: 7:05



5. _____

6) Start: _____

Elapsed: 2 hrs & 25 mins

End: 10:40

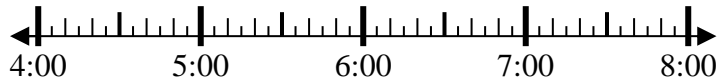


6. _____

7) Start: _____

Elapsed: 2 hrs & 55 mins

End: 7:05

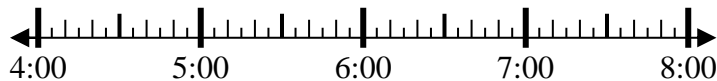


7. _____

8) Start: _____

Elapsed: 2 hrs & 20 mins

End: 6:20



8. _____

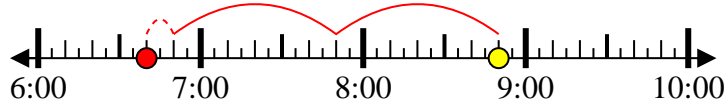


Solve each problem.

1) Start: 12:10
 Elapsed: 1 hr & 25 mins
 End: 1:35



2) Start: 6:40
 Elapsed: 2 hrs & 10 mins
 End: 8:50



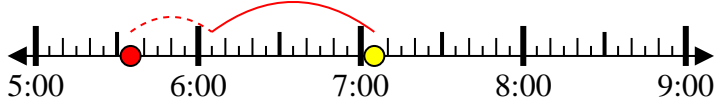
3) Start: 9:05
 Elapsed: 2 hrs & 50 mins
 End: 11:55



4) Start: 10:45
 Elapsed: 2 hrs & 40 mins
 End: 1:25



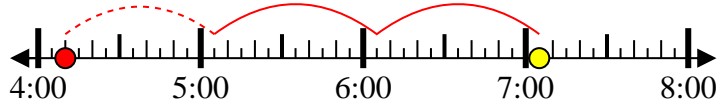
5) Start: 5:35
 Elapsed: 1 hr & 30 mins
 End: 7:05



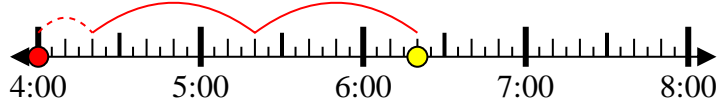
6) Start: 8:15
 Elapsed: 2 hrs & 25 mins
 End: 10:40



7) Start: 4:10
 Elapsed: 2 hrs & 55 mins
 End: 7:05



8) Start: 4:00
 Elapsed: 2 hrs & 20 mins
 End: 6:20



Answers

1. 12:10

2. 6:40

3. 9:05

4. 10:45

5. 5:35

6. 8:15

7. 4:10

8. 4:00